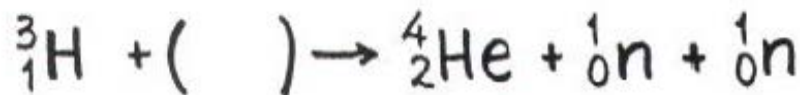
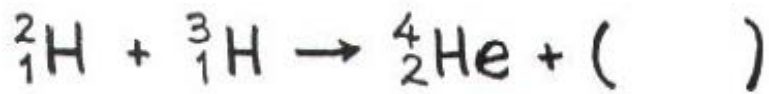
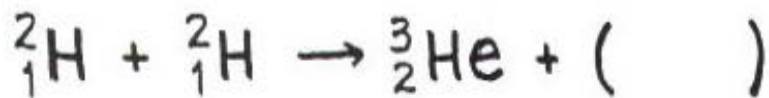




Grubleoppgave om fusjonsreaksjoner



Noen fusjonsreaksjoner til hydrogenisotoper er vist under i noe ufullstendig form. Kan du fullføre dem?





Løsning:

